






# 9. Patterns







Q1. The flower has lost all its petals.  
Help the flower by finding the petals and  
drawing them one by one.

					
---	---	---	--	--	--

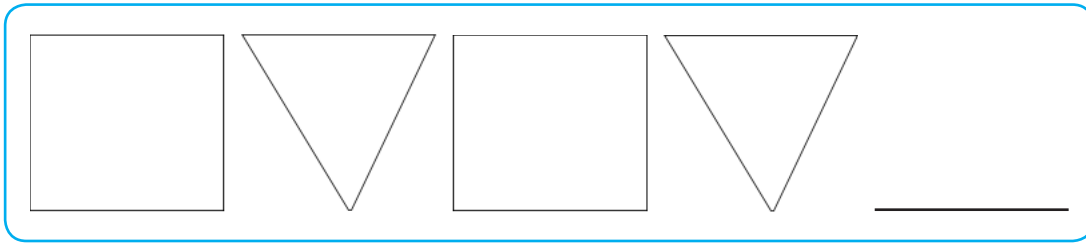
Q2. Pollution in the city is harming the aquatic life also. The number of fish is decreasing day by day. Follow the pattern and draw the correct number of fish in each box.

			
---	---	--	--



Q3. Follow the pattern and complete the picture by drawing and colouring.

			
---	---	---	---



Q4. What will come next in sequence?



Q5. Tick the correct missing shape:



Q6. What will come next in sequence?





c.

Q7. Observe the number pattern and write the number that will come next.

10	13	16	19	
----	----	----	----	--

Q8. Rajat has to deliver newspapers to the house numbers in the following sequence. What will be the number of the next house?

14, 12, 10, ?

Answer: \_\_\_\_

Q9. Draw a pattern using a square and a circle.

Q10. Observe the number sequence and extend it upto 20.

2, 5, 8, .....

Q11. Swati buys packets of candies for her shop in the following sequence. How many packets will she buy on Friday?


Day	Number of packets
Monday	10
Tuesday	20
Wednesday	30
Thursday	—
Friday	—

Answer: \_\_\_\_ packets

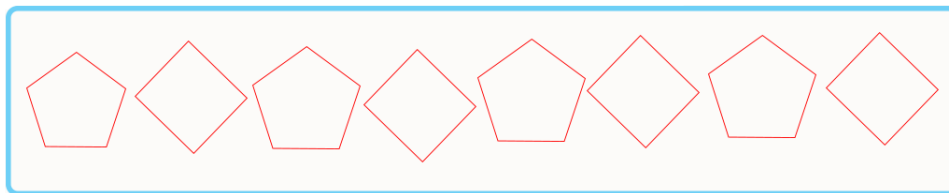
Q12. Complete the following pattern:



Q13. The mouse has to find the cheese. Help the mouse by completing the pattern.



Q14. Colour the following in a pattern.





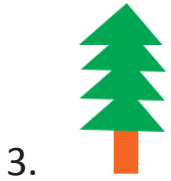
Q15. Which of the following is a pattern?

- a.
- b.
- c.

## Answers

1. 3 petals, 4 petals, 5 petals

2. 3 fish, 1 fish



6. (a)

7. 22

8. 8

10. 11, 14, 17, 20

11. 50 packets



15. (b)